

Q1 Rearrange the jumbled-up letters in their natural sequence and find the odd one out.

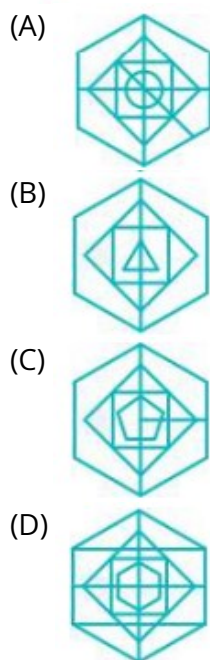
- (A) APRUIJ (B) LINAMA
(C) GLEUMBA (D) OSORIN

Q2 Select the word that is related to the third word in the same way as the second word is related to the first word.

Nephrology : Kidneys : : Hematology : ?

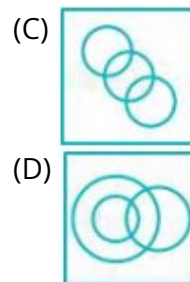
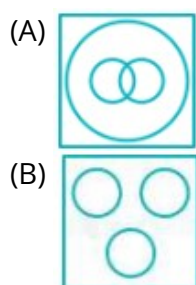
- (A) Blood (B) Skin
(C) Bones (D) Liver

Q3 Select the option figure in which the given figure is embedded (rotation is not allowed)



Q4 Identify the Venn diagram that best represents the relationship among classes given below.

Cobra, Moth, Salamander

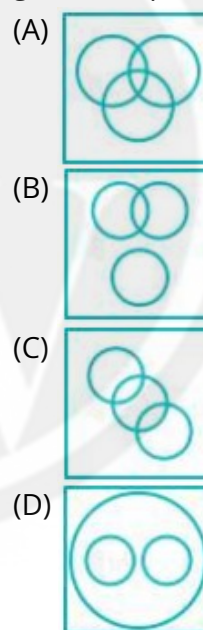


Q5 Choose the odd pair of words.

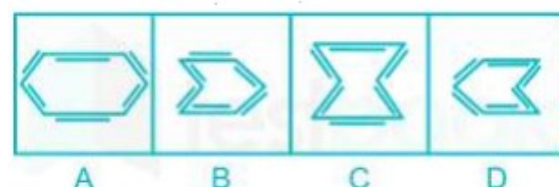
- (A) TIRANA - ALGERIA
(B) VIENNA - AUSTRIA
(C) HELSINKI - HUNGARY
(D) TEHRAN - IRAQ

Q6 Identify the Venn diagram that best represents the relationship among classes given below.

goods, ship, truck



Q7 In the following question, select the odd image from the given alternatives.



- (A) A (B) B
(C) C (D) D



Q8 Select the word that is related to the third word in the same way as the second word is related to the first word.

Lion : Roar :: Bear : ?

- (A) Bellow (B) Bleat
(C) Growl (D) Rattle

Q9 From amongst the figures marked (a), (b), (c) and (d), select the figure which satisfies the same conditions of placement of the dots as in figure (X).

Problem Figure:



Answer Figure:



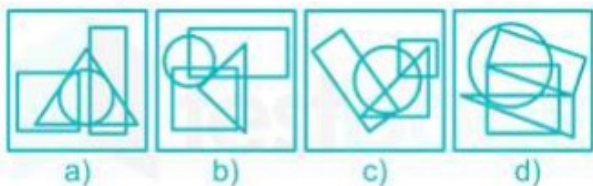
- (A) a (B) b
(C) c (D) d

Q10 From among the figures marked (a), (b), (c) and (d), select the figure which satisfies the same conditions as the placement of the dots as in figure (x).

Problem Figure:



Answer Figure:



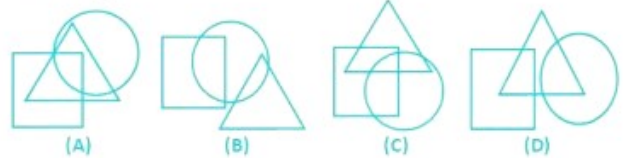
- (A) c (B) a
(C) d (D) b

Q11 From amongst the figures marked (A), (B), (C) and (D), select the figure which satisfies the same

conditions of placement of dots as in figure (X). Problem Figure:



Answer Figures:



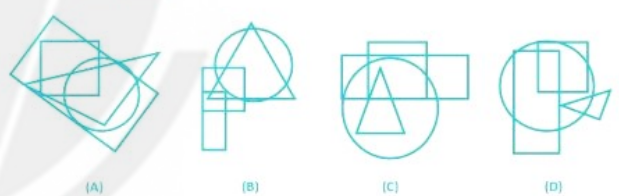
- (A) D (B) C
(C) B (D) A

Q12 From amongst the figures marked (A), (B), (C) and (D), select the figure which satisfies the same conditions of placement of dots as in figure (X).

Problem Figure:



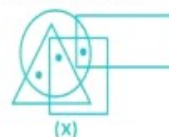
Answer Figures:



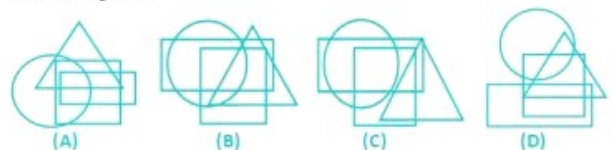
- (A) B (B) C
(C) D (D) A

Q13 From amongst the figures marked (A), (B), (C) and (D), select the figure which satisfies the same conditions of placement of dots as in figure (X).

Problem Figure:



Answer Figures:



- (A) B (B) A

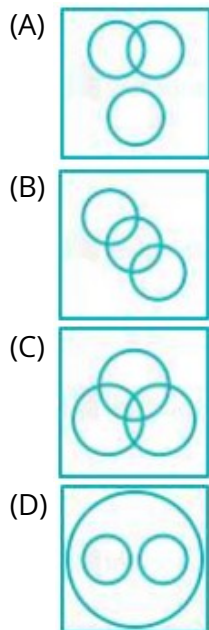


(C) C

(D) D

Q14 Identify the Venn diagram that best represents the relationship among classes given below.

root vegetables, carrot, parsnip



Q15 Find the odd one out.

- (A) Lord Tennyson
(B) Lord Mountbatten
(C) Lord Dalhousie
(D) Lord Linlithgow

Q16 Select the word that is related to the third word in the same way as the second word is related to the first word.

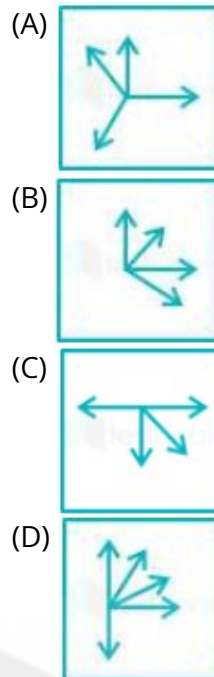
England : Atlantic : Greenland : ?

- (A) Antarctic ocean
(B) Pacific ocean
(C) Arctic ocean
(D) Indian ocean

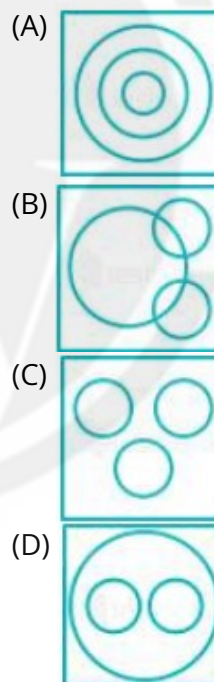
Q17 Choose the odd pair of words

- (A) Turning points - A. P. J. Abdul Kalam
(B) Flight of Pigeons - Swami Vivekananda
(C) Pathway to God - Ruskin Bond
(D) The Cherry Tree - Rabindranath Tagore

Q18 In the given questions, there are four figures given out of which three are similar in some manner and one is not like the others. Select the figure which is odd one out.



Q19 Which one of the following Venn diagrams best represents the relationship between Snake, Lizard and Reptiles?



Q20 Select the option that is related to the third term in the same way as the second term is related to the first term.

CLIMB : FHLQD :: CREPT : ?

- (A) FNHTV (B) FNHVM
(C) FHNLV (D) FNHLM

Q21 Select the figure that will come next in the following figure series.



○	☆	?	%	?	>	↑	>	!	@
▲	☆	©	%	↑		@	□		®
\$	φ	=	▲	#	φ	©	¥	#	↑

- (A)
- (B)
- (C)
- (D)

Q22 Which of the option figure will replace the question mark (?) to continue the figure series given below?

E	F	G	E	+	G	\$	+	
S		F		E		G		?
G	+	+	\$	\$	@	@	#	

- (A)
- (B)
- (C)
- (D)

Q23 Which figure will replace the question mark (?) in the following series?

◇	◇	△	◇	⇒	◇	☆	△	?	△	☆
○	◇	◇	◇	◇	△	◇	⇒		⇒	↑

- (A)
- (B)
- (C)
- (D)

Q24 Select the figure that will come next in the following series.

					?
--	--	--	--	--	---

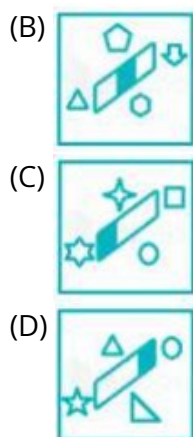
- (A)
- (B)
- (C)
- (D)

Q25 Select the figure that will come next in the following series.

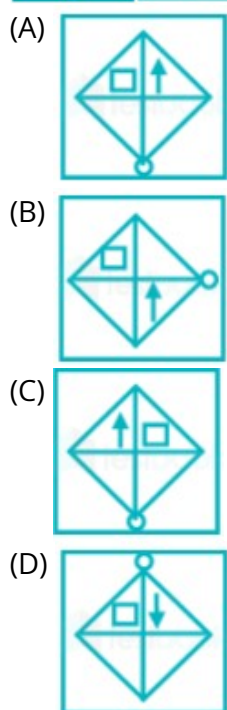
--	--	--	--	--

- (A)





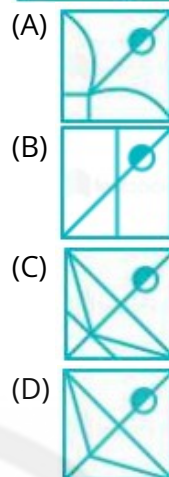
Q26 Select the figure that can replace the question mark (?) in the following series.



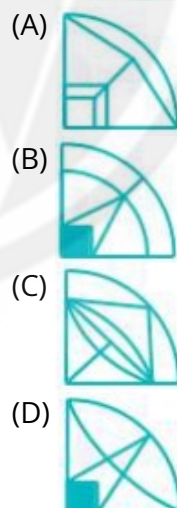
Q27 Choose the odd pair of words.

- (A) Atacama - South America
- (B) Sahara - Africa
- (C) Karakum - Argentina
- (D) Taklamakan - China

Q28 Which answer figure will complete the pattern in the following question figure?

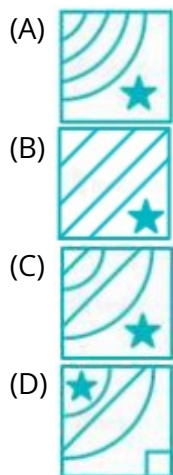


Q29 Which answer figure will complete the pattern in the following question figure?



Q30 Choose from the alternatives the figure that best completes the pattern given below.





Q31 If in a certain code language, SETTING is coded as TGWXNTN. How will CERTAIN be coded in the same language?

- (A) DFSUBJO (B) DGUXFOU
(C) VGUXPFD (D) GUXPFDV

Q32 Select the option that is related to the third term in the same way as the second term is related to the first term.

SAVING : TYWGOE:: BONUS : ?

- (A) DCOMR (B) CMRST
(C) DOMTR (D) CMOST



Answer Key

Q1 D
Q2 A
Q3 A
Q4 B
Q5 B
Q6 C
Q7 D
Q8 C
Q9 D
Q10 C
Q11 B
Q12 D
Q13 B
Q14 D
Q15 A
Q16 C

Q17 A
Q18 D
Q19 D
Q20 A
Q21 D
Q22 C
Q23 D
Q24 C
Q25 A
Q26 A
Q27 C
Q28 C
Q29 D
Q30 C
Q31 B
Q32 D



Hints & Solutions

Note: scan the QR code to watch video solution

Q1 Text Solution:

Now, let's analyze each word:

JUPAIR (APRUIJ rearranged) doesn't form a recognizable word.

MANIABL (BLINAMA rearranged) doesn't form a recognizable word.

AMBULEG (GLEUMBA rearranged) doesn't form a recognizable word.

ORISON (OSORIN rearranged) is a valid word meaning a prayer.

Among the options, "ORISON" (D) is the only word that makes sense in its rearranged form.

Therefore, the odd one out is:

D) OSORIN

Q2 Text Solution:

Nephrology is the branch of medicine that deals with the study of kidneys.

Kidneys are the specific organs studied in nephrology.

To find a word related to Hematology in a similar way:

Hematology is the branch of medicine that deals with the study of blood.

Blood is the specific entity studied in hematology.

Therefore, the word related to Hematology in the same way as Kidneys are related to Nephrology is **Blood**.

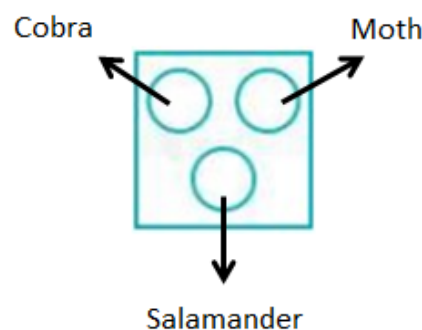
Q3 Text Solution:

The question figure is embedded/hidden in the following figure(embedded part shown by darker lines)



Hence, **option A** is the correct answer.

Q4 Text Solution:



Hence, the correct answer is option B.

Q5 Text Solution:

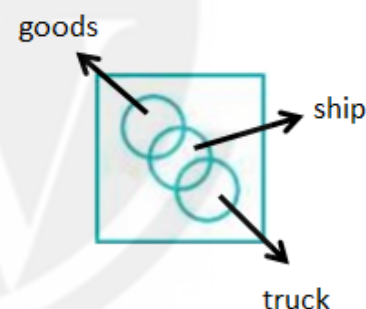
Logic followed here is:

Here, all the capital city with respect of country wrongly given except, VIENNA - AUSTRIA.

Vienna is the capital city of Austria.

Hence, the correct answer is "VIENNA - AUSTRIA".

Q6 Text Solution:



Hence, the correct answer is option C.

Q7 Text Solution:

Straight line clockwise rotate alternate in inside and outside but in option (D) this pattern is not followed.



Hence, the correct answer is option D.



[Android App](#)

| [iOS App](#)

| [PW Website](#)

Q8 Text Solution:

The logic followed here is:

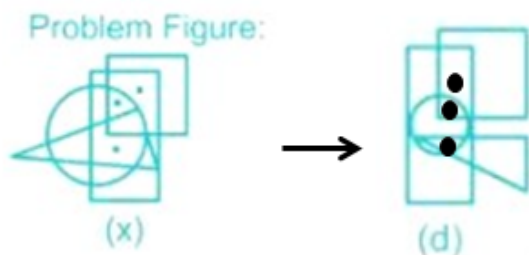
The sound of a Lion is called "Roar"

Similarly,

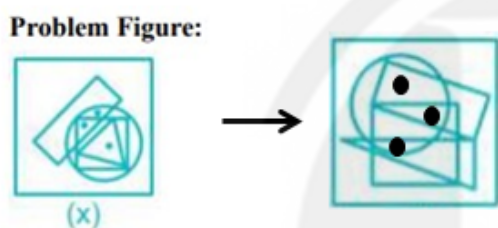
The sound of a Bear is called "Growl"

Q9 Text Solution:

Option (D): The figure satisfied the condition.

**Q10 Text Solution:**

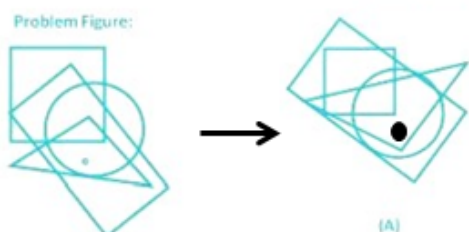
Option (C): The figure satisfied the condition.

**Q11 Text Solution:**

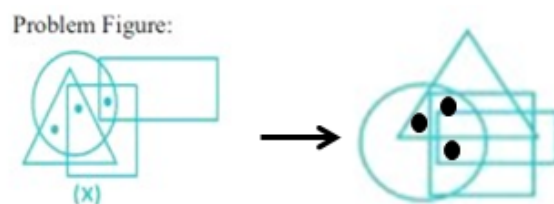
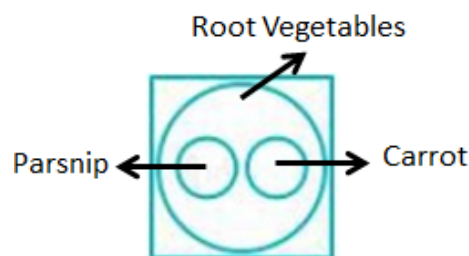
Option (B): The figure satisfied the condition.

**Q12 Text Solution:**

Option (D): The figure satisfied the condition.

**Q13 Text Solution:**

Option (B): The figure satisfied the condition.

**Q14 Text Solution:**

Hence, the correct answer is option D.

Q15 Text Solution:

The correct option is A Lord Tennyson

All except Lord Tennyson were viceroy or governor general of India

Q16 Text Solution:

The logic followed here is:

* England is an island in the Atlantic Ocean.

Similarly,

* Greenland is an island in the Arctic Ocean.

Hence, the correct answer is "Arctic ocean";

Q17 Text Solution:

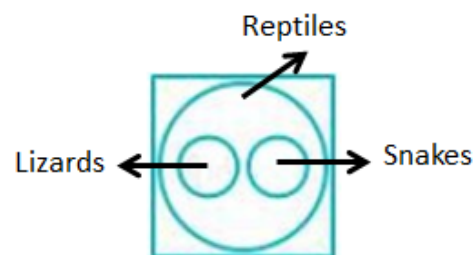
The logic followed here is:

Except "Turning points - A. P. J. Abdul Kalam" all others books are written by some other author.

Hence, the correct answer is "Turning points - A. P. J. Abdul Kalam"

Q18 Text Solution:

Option (d) is odd one out because in this option there are five arrows.

Q19 Text Solution:

Hence, the correct answer is option D.

Q20 Text Solution:

Let's analyze the relationship:

$$C + 3 \rightarrow F$$

$$L - 4 \rightarrow H$$

$$I + 3 \rightarrow L$$

$$M + 4 \rightarrow Q$$

$$B + 2 \rightarrow D$$

Applying the same shift to the word "CREPT ":

$$C + 3 \rightarrow F$$

$$R - 4 \rightarrow N$$

$$E + 3 \rightarrow H$$

$$P + 4 \rightarrow T$$

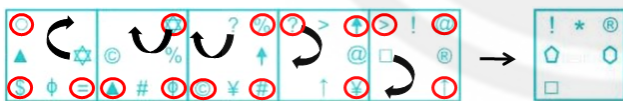
$$T + 2 \rightarrow V$$

Therefore, the word "CREPT " after applying the same letter shift pattern as in "CLIMB" becomes "FNHTV".

So, the answer is FNHTV.

Q21 Text Solution:

In every next image red circle symbol is change to new symbol and all symbol rotate anti-clockwise direction.



Hence, the correct answer is option D.

Q22 Text Solution:

The pattern followed here is:



New symbol

Hence, figure given in option (c) is the correct alternative.

Q23 Text Solution:

The pattern followed here is:



Hence, figure given in option (d) is the correct alternative.

Q24 Text Solution:

The pattern followed here is:

In each step, all the symbols are moving in 180° clockwise direction. A new symbol is replaced sequentially in anti-clockwise direction.

Thus, the next image in the series will be:



Hence, figure given in option (c) is the correct alternative.

Q25 Text Solution:

The pattern followed here is:

In each step, all the symbols are moving in clockwise direction. A new symbol is replaced sequentially in anti-clockwise direction.

Thus, the next image in the series will be:



Hence, figure given in option 1 is the correct alternative.

Q26 Text Solution:

The pattern is followed here is:

In the figure circle is rotating 90° in the anti-clockwise direction and arrow is rotating 90° clockwise direction.



Hence, the correct answer is option A.

Q27 Text Solution:

The logic followed here is:

All desert are found in the same country/continent, but "Karakum" is not found in Argentina.

Hence, the correct answer is "Karakum - Argentina".

Hence, the correct answer is option C.

Q28 Text Solution:

The missing figure in the bottom left side is the exact mirror image of the figure on the bottom right side, so the figure that will complete the pattern of the question figure is as shown below:



Hence, the correct answer is option C.

Q29 Text Solution:

The missing figure in the bottom left side is the exact mirror image of the figure on the bottom right side, so the figure that will complete the pattern of the question figure is as shown below:



Hence, the correct answer is option D.

Q30 Text Solution:

The missing figure in the bottom left side is the exact mirror image of the figure on the bottom right side, so the figure that will complete the pattern of the question figure is as shown below:



Hence, the correct answer is option C.

Q31 Text Solution:

The pattern followed here is:

$S + 1 \rightarrow T$

$E + 2 \rightarrow G$

$T + 3 \rightarrow W$

$T + 4 \rightarrow X$

$I + 5 \rightarrow N$

$N + 6 \rightarrow T$

$G + 7 \rightarrow N$

Similar,

$C + 1 \rightarrow D$

$E + 2 \rightarrow G$

$R + 3 \rightarrow U$

$T + 4 \rightarrow X$

$A + 5 \rightarrow F$

$I + 6 \rightarrow O$

$N + 7 \rightarrow U$

Q32 Text Solution:

Let's analyze the relationship:

Logic: $+1$ and -2 .

$S + 1 \rightarrow T$

$A - 2 \rightarrow Y$

$V + 1 \rightarrow W$

$I - 2 \rightarrow G$

$N + 1 \rightarrow O$

$G - 2 \rightarrow E$

Applying the same shift to the word "BONUS":

$B + 1 \rightarrow C$

$O - 2 \rightarrow M$

$N + 1 \rightarrow O$

$U - 2 \rightarrow S$

$S + 1 \rightarrow T$

Therefore, the word "BONUS" after applying



the same letter shift pattern as in "SAVING"
becomes CMOST.

So, the answer is CPOTV.



[Android App](#)



[iOS App](#)



[PW Website](#)

